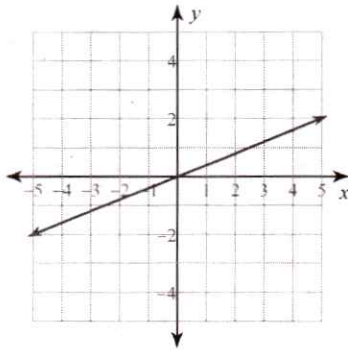


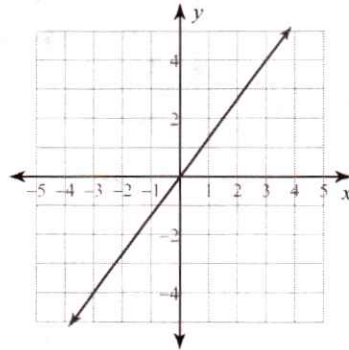
Sub Work 10.31.19

Write the slope-intercept form of the equation of each line.

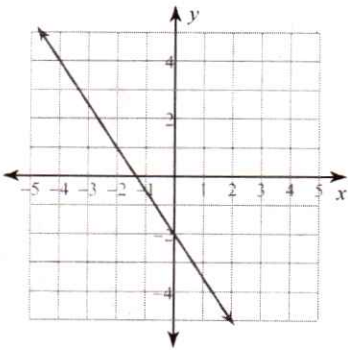
1)



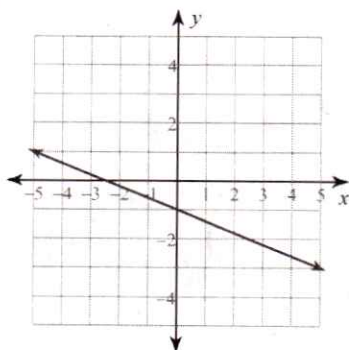
2)



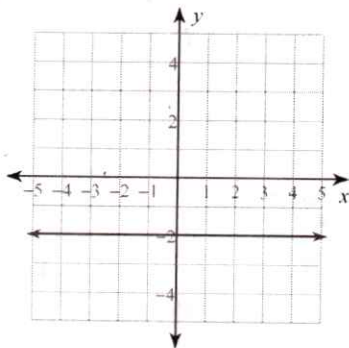
3)



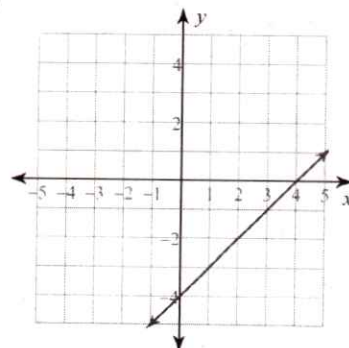
4)



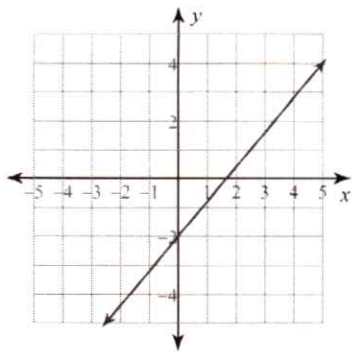
5)



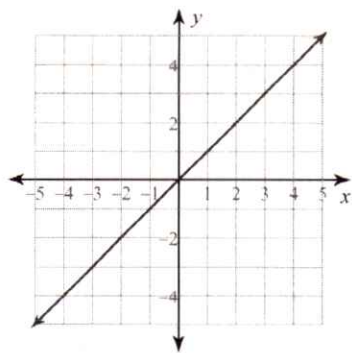
6)



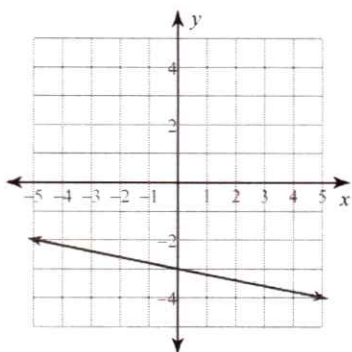
7)



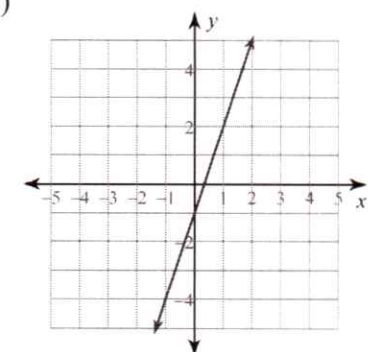
8)



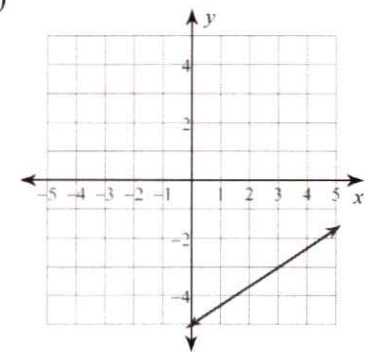
9)



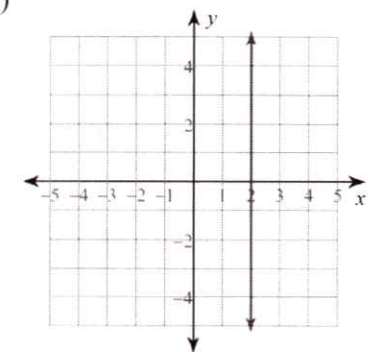
10)



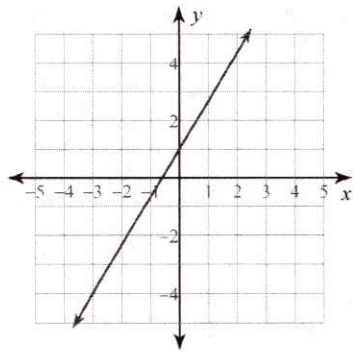
11)



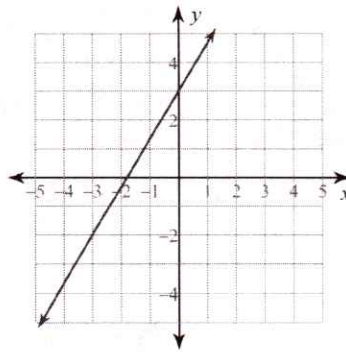
12)



13)



14)



Write the slope-intercept form of the equation of each line given the slope and y-intercept.

15) Slope = 9, y-intercept = -5

16) Slope = -8, y-intercept = -3

17) Slope = $\frac{1}{2}$, y-intercept = -218) Slope = $\frac{7}{3}$, y-intercept = -4

19) Slope = 5, y-intercept = -2

20) Slope = 3, y-intercept = 4

21) Slope = $\frac{3}{2}$, y-intercept = 422) Slope = $-\frac{1}{3}$, y-intercept = -4

23) Slope = 2, y-intercept = -3

24) Slope = 0, y-intercept = 4

Write the slope-intercept form of the equation of each line.

25) $x - y = -8$

26) $y = 8$

27) $3x + 2y = 21$

28) $4x + y = -4$

29) $2x - 7y = -48$

30) $3x - 2y = -2$

31) $x + 7y = 42$

32) $13x - y = -8$

33) $3x - 8y = 32$

34) $7x - 8y = 48$

35) $x - 2y = 10$

36) $9x - y = -2$

37) $x + 3y = -15$

38) $4x + y = -9$

39) $3x - 2y = 0$

40) $6x + 7y = -7$